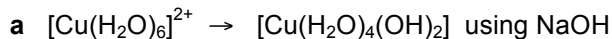


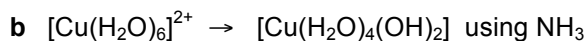


Write equations for each of the following conversions, and name the reaction type.



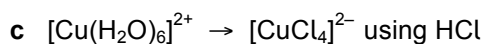
equation .....

reaction type .....



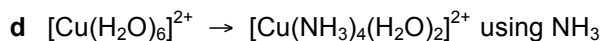
equation .....

reaction type .....



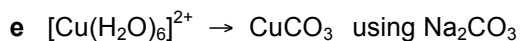
equation .....

reaction type .....



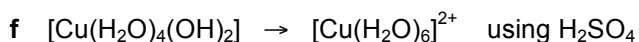
equation .....

reaction type .....



equation .....

reaction type .....



equation .....

reaction type .....



equation .....

reaction type .....